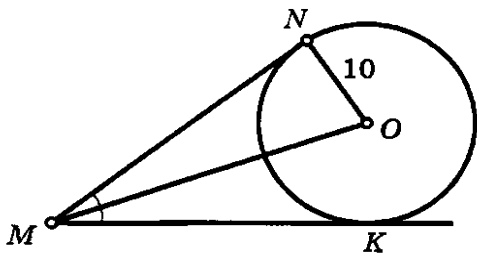
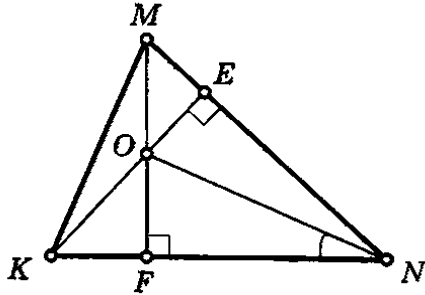


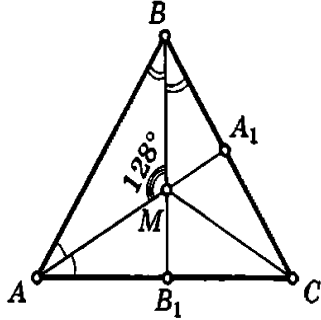
1 |  $\angle NMK = 60^\circ$ ,  $MO = ?$



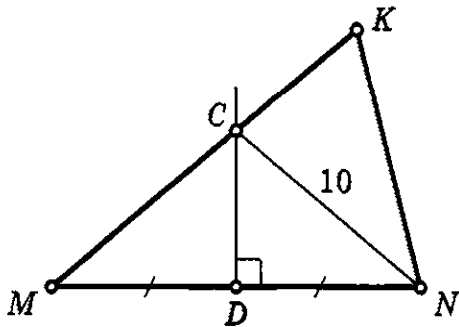
2 |  $\angle MKN = 66^\circ$ ,  $\angle FNO = ?$



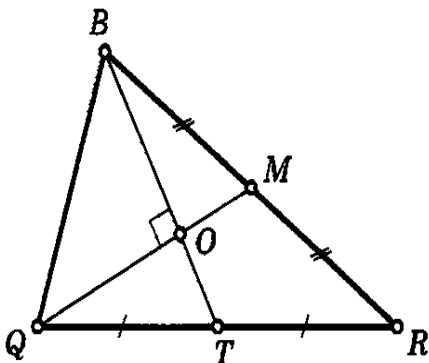
3 |  $\angle MCB_1 = ?$



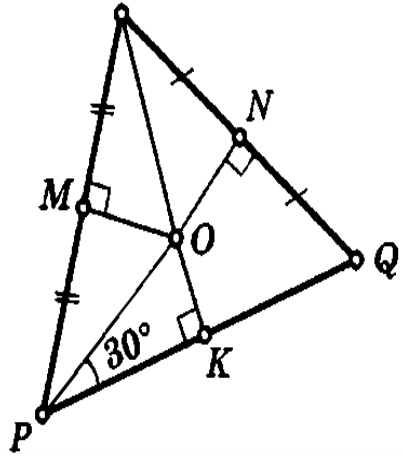
4 |  $MK = 17$ ,  $CK = ?$



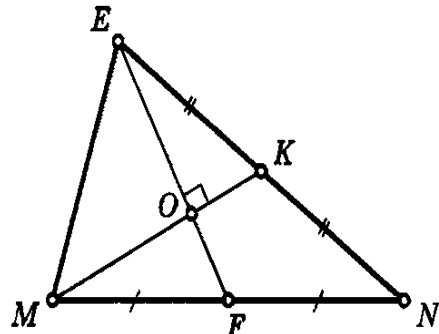
5 |  $QM = 9$ ,  $BT = 12$ ,  $S_{\triangle BOQ} = ?$



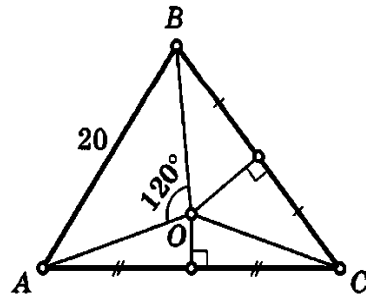
6 |  $RO = 20$ ,  $OK = ?$



7 |  $EF = 18$ ,  $MK = 15$ ,  $ON = ?$



8 |  $OC = ?$



9 |  $\angle MON = ?$

